

6. 받아내림이 없는 진분수의 뺄셈

[01 ~ 09] 계산해 보세요.

01 $\frac{2}{5} - \frac{1}{5}$

02 $\frac{5}{7} - \frac{1}{7}$

03 $\frac{5}{8} - \frac{2}{8}$

04 $\frac{4}{9} - \frac{3}{9}$

05 $\frac{9}{10} - \frac{6}{10}$

06 $\frac{10}{12} - \frac{3}{12}$

07 $\frac{13}{15} - \frac{6}{15}$

08 $\frac{16}{20} - \frac{7}{20}$

09 $\frac{15}{21} - \frac{7}{21}$

[10 ~ 13] 큰 수에서 작은 수를 뺀 값을 구해 보세요.

10 $\frac{2}{4}$ $\frac{1}{4}$

()

11 $\frac{9}{11}$ $\frac{4}{11}$

()

12 $\frac{13}{16}$ $\frac{6}{16}$

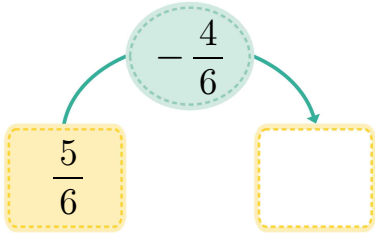
()

13 $\frac{19}{23}$ $\frac{7}{23}$

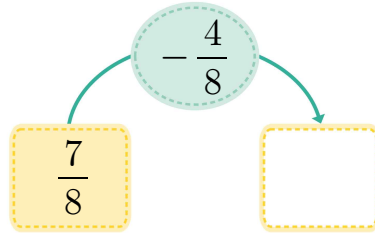
()

[14~21] 빈칸에 알맞은 수를 써넣으세요.

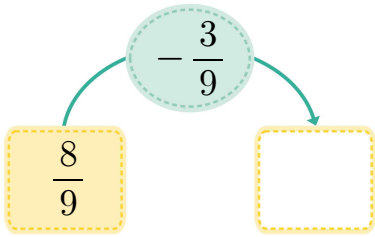
14



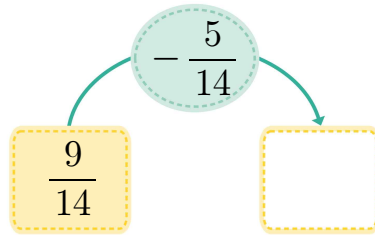
15



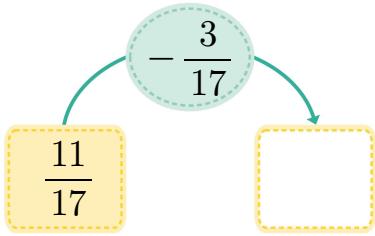
16



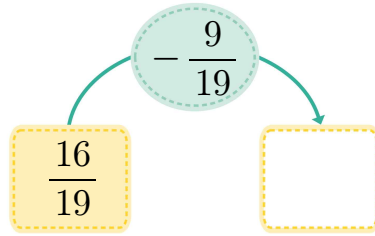
17



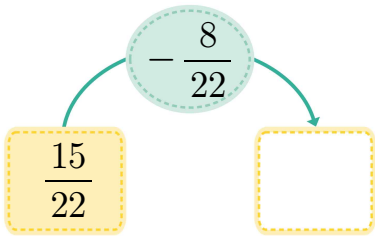
18



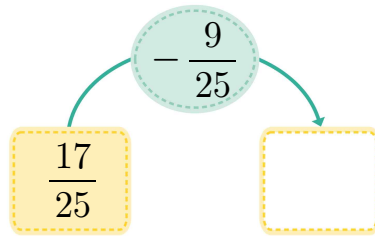
19



20



21



[22~23] 합의 크기를 비교하여 ○ 안에 >, =, < 를 알맞게 써넣으세요.

22

$$\frac{11}{13} - \frac{6}{13} \quad \bigcirc \quad \frac{12}{13} - \frac{8}{13}$$

23

$$\frac{13}{20} - \frac{4}{20} \quad \bigcirc \quad \frac{17}{20} - \frac{9}{20}$$

[01 ~ 09] 계산해 보세요.

01 $\frac{2}{5} - \frac{1}{5} = \frac{1}{5}$

02 $\frac{5}{7} - \frac{1}{7} = \frac{4}{7}$

03 $\frac{5}{8} - \frac{2}{8} = \frac{3}{8}$

04 $\frac{4}{9} - \frac{3}{9} = \frac{1}{9}$

05 $\frac{9}{10} - \frac{6}{10} = \frac{3}{10}$

06 $\frac{10}{12} - \frac{3}{12} = \frac{7}{12}$

07 $\frac{13}{15} - \frac{6}{15} = \frac{7}{15}$

08 $\frac{16}{20} - \frac{7}{20} = \frac{9}{20}$

09 $\frac{15}{21} - \frac{7}{21} = \frac{8}{21}$

[10 ~ 13] 큰 수에서 작은 수를 뺀 값을 구해 보세요.

10 $\frac{2}{4}$ $\frac{1}{4}$

($\frac{1}{4}$)

11 $\frac{9}{11}$ $\frac{4}{11}$

($\frac{5}{11}$)

12 $\frac{13}{16}$ $\frac{6}{16}$

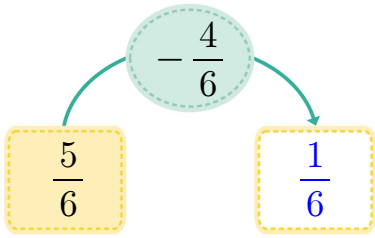
($\frac{7}{16}$)

13 $\frac{19}{23}$ $\frac{7}{23}$

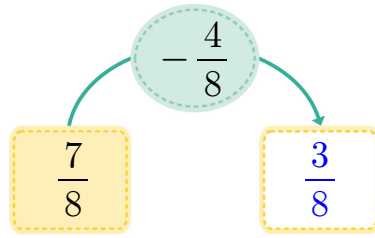
($\frac{12}{23}$)

[14~21] 빈칸에 알맞은 수를 써넣으세요.

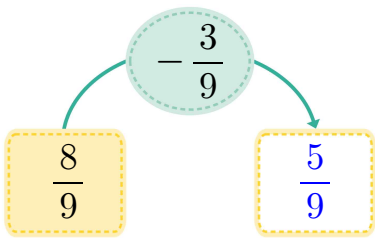
14



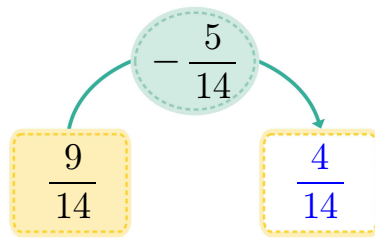
15



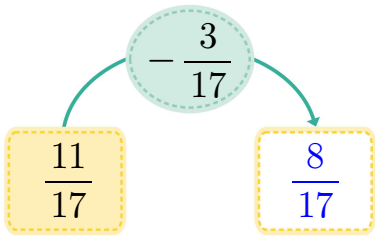
16



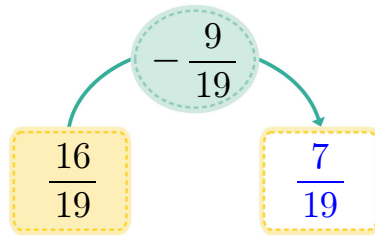
17



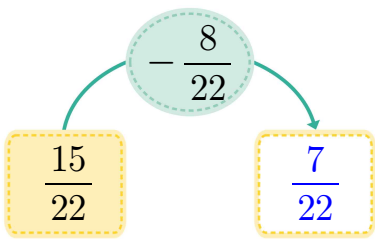
18



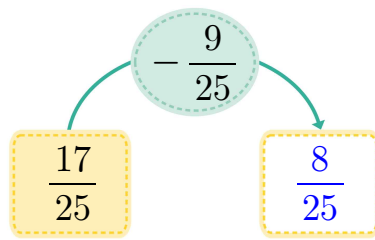
19



20



21



[22~23] 합의 크기를 비교하여 ○ 안에 >, =, < 를 알맞게 써넣으세요.

22

$$\frac{11}{13} - \frac{6}{13} \quad \bigcirc \quad \frac{12}{13} - \frac{8}{13}$$

23

$$\frac{13}{20} - \frac{4}{20} \quad \bigcirc \quad \frac{17}{20} - \frac{9}{20}$$